

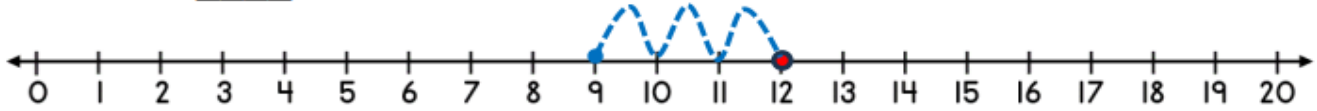
Name _____

Date _____

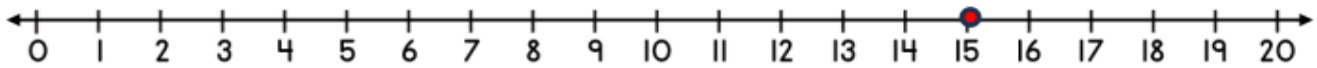
SUBTRACTING ON A NUMBER LINE WITHIN 20 SHEET 1

Jump back in ones from the starting number to find the answer.

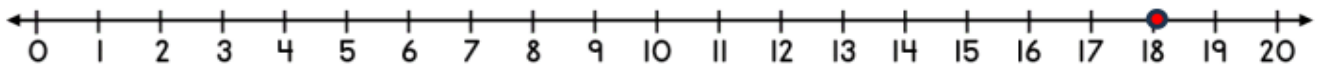
1) $12 - 3 =$ _____



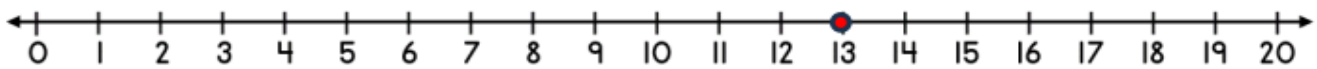
2) $15 - 2 =$ _____



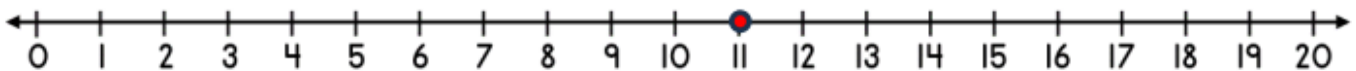
3) $18 - 4 =$ _____



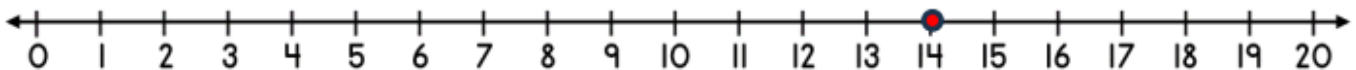
4) $13 - 3 =$ _____



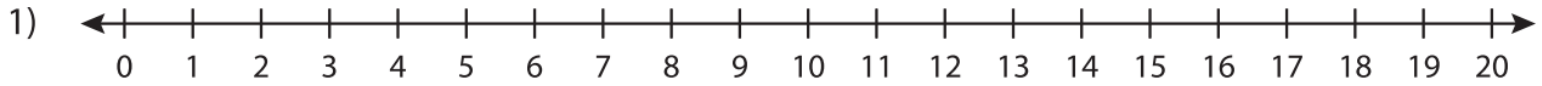
5) $11 - 5 =$ _____



6) $14 - 6 =$ _____



Solve using number line.



a) $16 - 2 = \underline{\quad}$

b) $7 - 4 = \underline{\quad}$

c) $12 - 11 = \underline{\quad}$

d) $8 - 6 = \underline{\quad}$

e) $13 - 10 = \underline{\quad}$

f) $6 - 2 = \underline{\quad}$

g) $20 - 8 = \underline{\quad}$

h) $9 - 9 = \underline{\quad}$

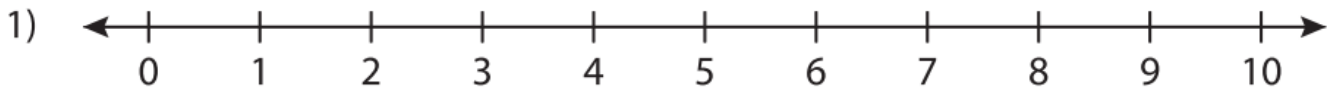
i) $17 - 7 = \underline{\quad}$

j) $14 - 3 = \underline{\quad}$

k) $18 - 5 = \underline{\quad}$

l) $11 - 6 = \underline{\quad}$

Solve using number line.



a) $4 - 1 = \underline{\quad}$

b) $9 - 3 = \underline{\quad}$

c) $10 - 4 = \underline{\quad}$

d) $8 - 3 = \underline{\quad}$

e) $3 - 1 = \underline{\quad}$

f) $7 - 7 = \underline{\quad}$

g) $6 - 4 = \underline{\quad}$

h) $7 - 6 = \underline{\quad}$

i) $9 - 2 = \underline{\quad}$

j) $10 - 2 = \underline{\quad}$

k) $8 - 8 = \underline{\quad}$

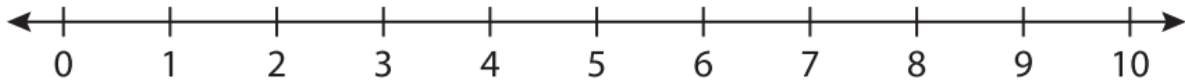
l) $5 - 1 = \underline{\quad}$

Name : _____

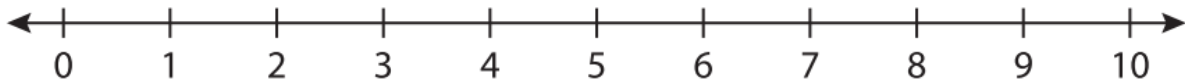
Number Line Subtraction

Indicate hops on each number line and complete the subtraction sentences.

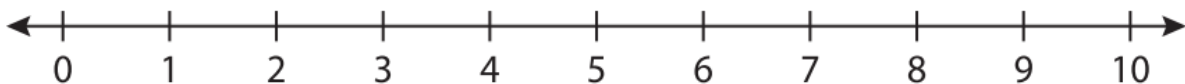
1) $7 - 4 =$ _____



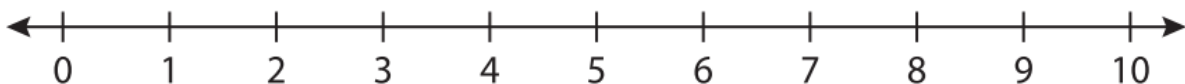
2) $9 - 2 =$ _____



3) $10 - 9 =$ _____



4) $3 - 1 =$ _____



5) $8 - 3 =$ _____

